

Section 8.4

Name _____

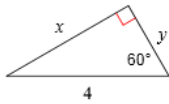
30-60-90 Triangles

Date _____ Period _____

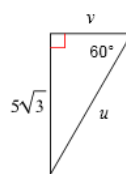
© 2012 Kuta Software LLC. All rights reserved.

Find the missing side lengths. Leave your answers as radicals in simplest form.

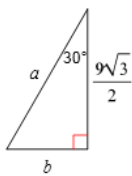
1)



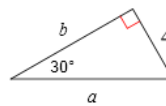
2)



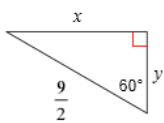
3)



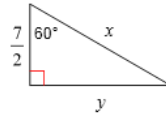
4)



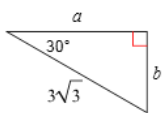
5)



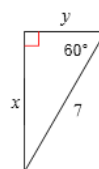
6)



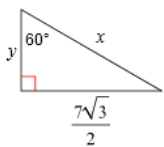
7)



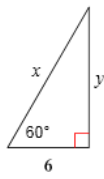
8)



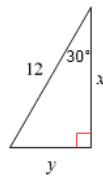
9)



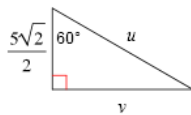
10)



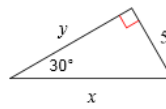
11)



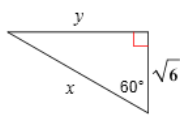
12)



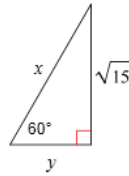
13)



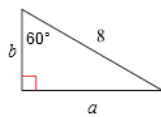
14)



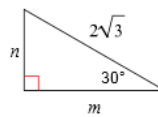
15)



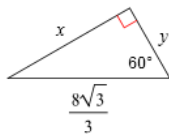
16)



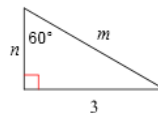
17)



18)



19)



20)

